


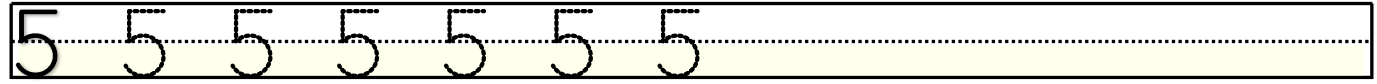
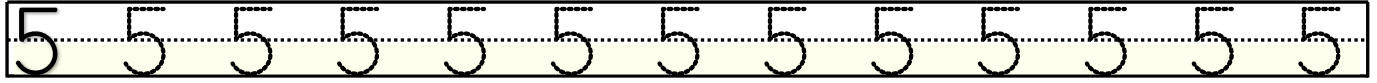
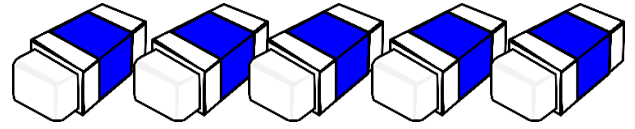

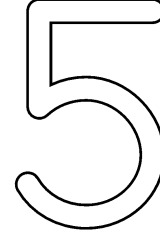
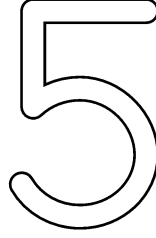
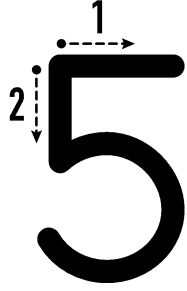




# Rakamlar ve Sayılar



Görselleri inceleyerek nesne sayısını yazalım.



Aşağıda verilenlerden 5 rakamı olan kutucukları boyayınız.

2	3	1	4	3	5	1	2	4	2	1	5
5	4	2	5	4	1	5	4	5	1	3	4
3	2	5	4	1	2	4	5	1	3	5	2
4	5	3	2	5	3	2	1	3	5	2	1