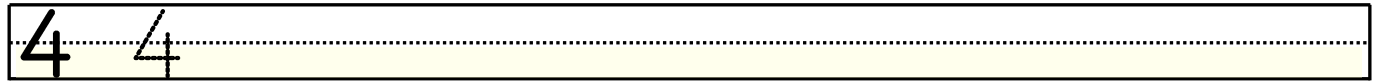


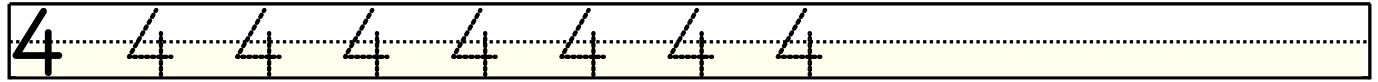
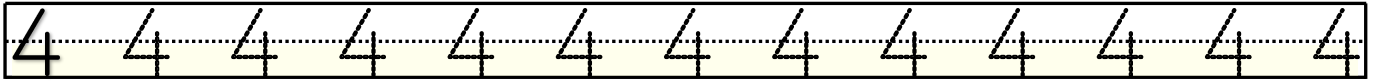
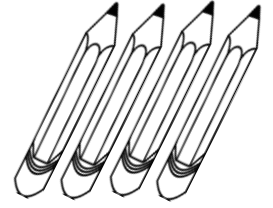
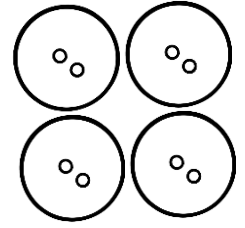
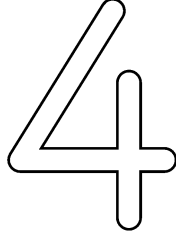




Rakamlar ve Sayılar



Görselleri inceleyerek nesne sayısını yazalım.



Aşağıda verilenlerden 4 rakamı olan kutucukları boyayınız.

2	3	1	4	3	4	1	2	4	2	1	3
1	4	2	3	4	1	3	4	2	1	3	4
3	2	1	4	1	2	4	3	1	3	4	2
4	1	3	2	4	3	2	1	3	4	2	1