


# ZAMANI ÖLÇME



Zamanı ölçmek için kullanılan araca **saat** denir.




Yelkovan 12'den 6'ya doğru ilerlerken tam saatten kaç dakika geçtiği söylenir. Yandaki "Sağ 3'ü 25 geçiyor." diye okunur.


Yelkovan 6'dan 12'ye doğru ilerlerken tam saate kaç dakika var olduğu söylenir. Yandaki "Sağ 5'e 10 var." diye okunur.



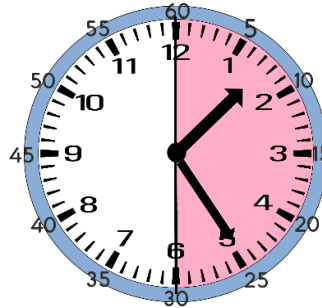
Aşağıda saatlerin belirttiği zamanı örnekteki gibi altlarına yazınız.




03.10  
3'ü 10 geçiyor.



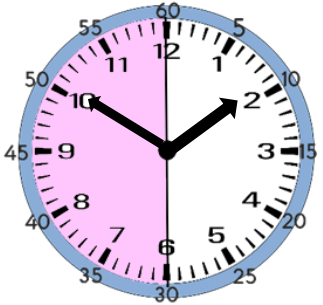
.....



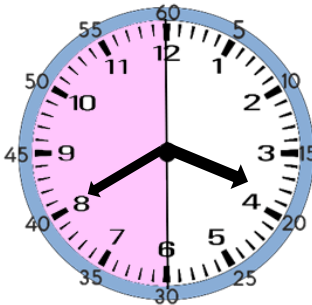
.....




.....



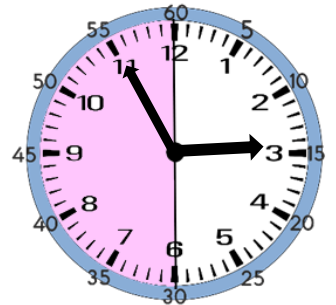
01.50  
2'ye 10 var.



.....



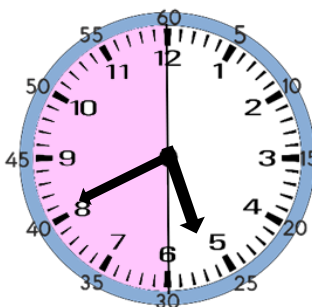
.....



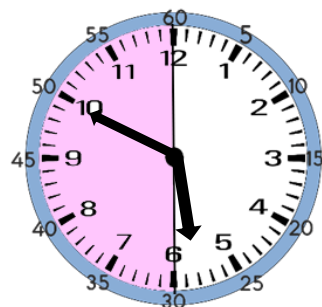
.....



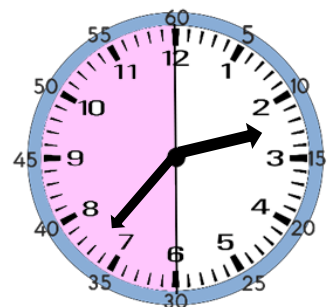
.....



.....



.....



.....