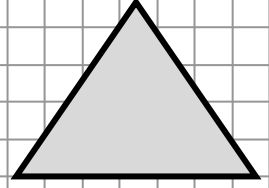
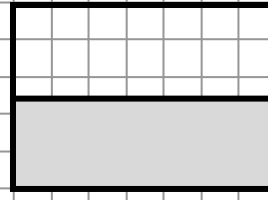
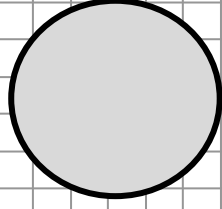
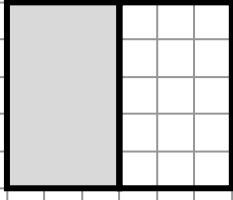
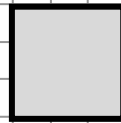


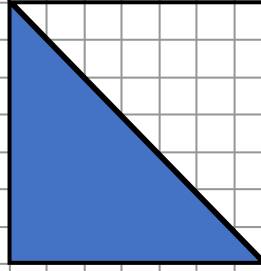
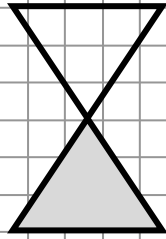
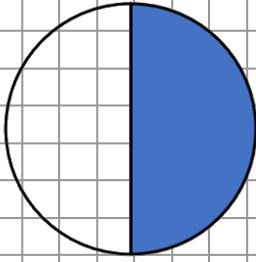


KESİRLER (Bütün – Yarım)

Şekillerin boyalı kısımlarının neyi ifade ettiğini yazınız



Yarım


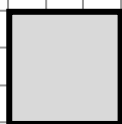
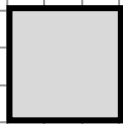


1 bütünden 2 yarım elde edilir.

1 bütün elmadan yarım elma elde edilir.

3 bütün elmadan yarım elma elde edilir.

5 bütün elmadan yarım elma elde edilir.



1 yarım 1 bütün eder.

4 yarım ekmek bütün ekmek eder.

6 yarım ekmek bütün ekmek eder.