
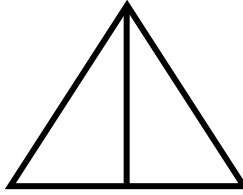


# KESİRLER

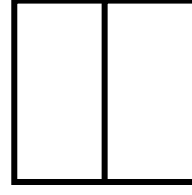
Aşağıdaki modellerin her birinin yarısını boyyalım. Noktalı yerlere modellerin belirttiği kesri yazalım.



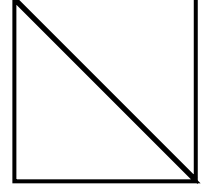
$$\frac{1}{2}$$



.....




.....




.....

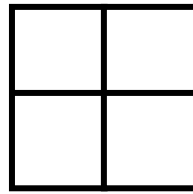
Aşağıdaki modellerin her birinin çeyreğini boyyalım. Noktalı yerlere modellerin belirttiği kesri yazalım.



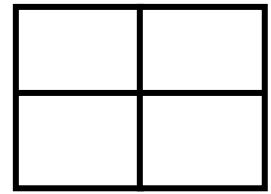
$$\frac{1}{4}$$



.....




.....




.....

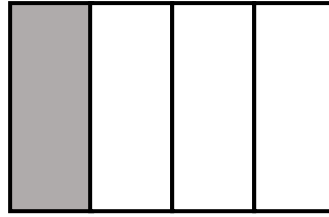
Aşağıdaki modelleri inceleyelim. Noktalı yerlere modellerin belirttiği kesri yazalım.



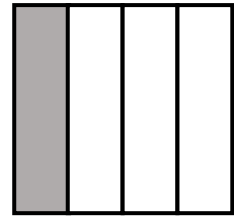
$$\frac{1}{2}$$



.....



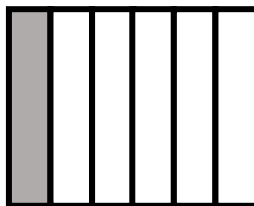
.....



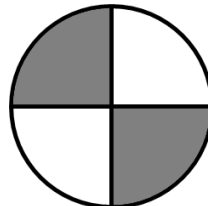
.....



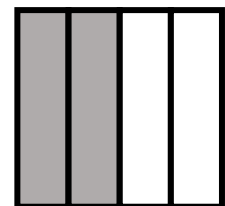
.....



.....



.....



.....