

BÜTÜN, YARIM VE ÇEYREK



Bütün



Yarım



Çeyrek



Yandaki bütün simitten tane yarım simit elde edilir.

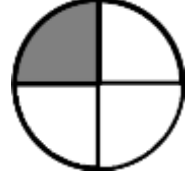






Yandaki yarım simitten tane çeyrek simit elde edilir.



Yandaki bütün simitten tane çeyrek simit elde edilir.

Şekillerdeki taralı bölümleri ve bu bölümlerin okunuşlarını eşleştirelim.




Bütün


Yarım

Çeyrek

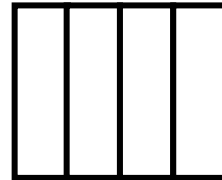
Aşağıdaki şekillerin istenen kadarını boyayınız



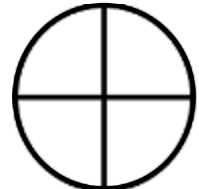
Bütün




Yarım




Çeyrek



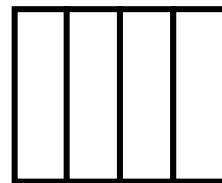
Yarım



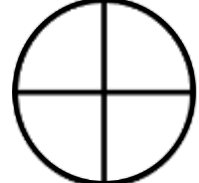
Yarım



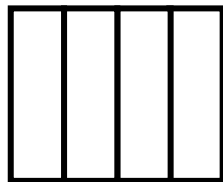
Bütün




Yarım



Çeyrek




Bütün



Çeyrek



Bütün



Çeyrek