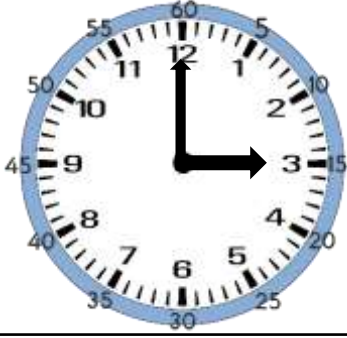


# SAAT KAÇ?

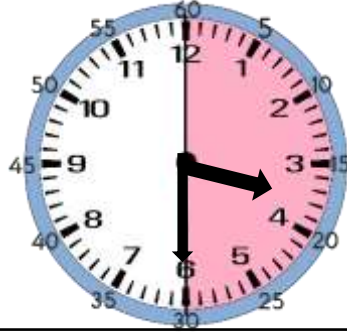
Akrep, saati gösterir. Yelkovan, dakikayı gösterir.

→ Akrep

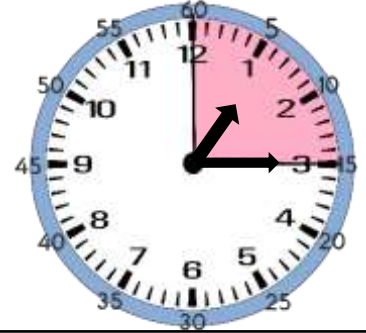
→ Yelkovan



1 saat, 60 dakikadır.



Yarım saat, 30 dakikadır.




Çeyrek saat, 15 dakikadır.

Saatlerin kaçı gösterdiğini örnekteki gibi yazalım.



10. 15



.....



.....




.....



.....



.....



.....



.....



.....



.....



.....



.....