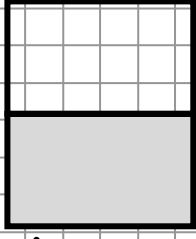
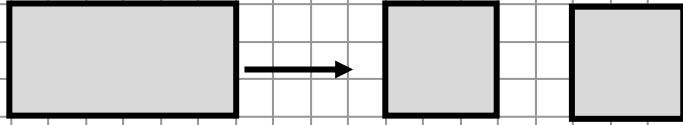
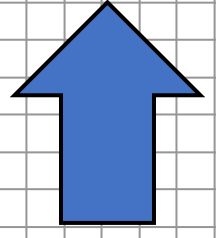
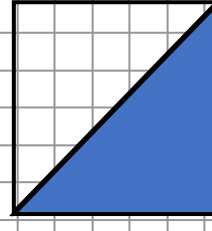
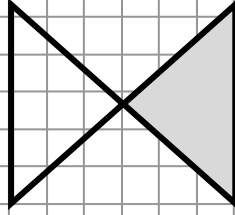
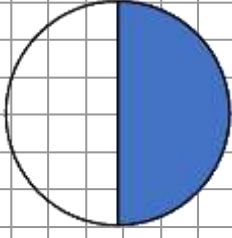
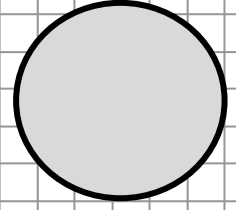
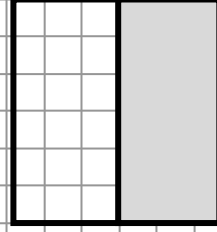
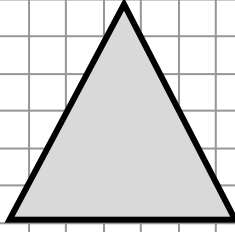


KESİRLER

Şekillerin boyalı kısımlarının neyi ifade ettiğini yazınız



Yarım

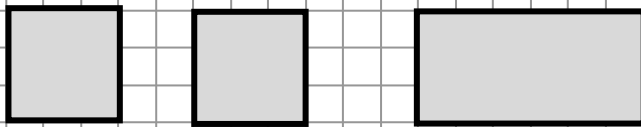


1 bütünden 2 yarım elde edilir.

2 bütün elmadan yarım elma elde edilir.

4 bütün elmadan yarım elma elde edilir.

5 bütün elmadan yarım elma elde edilir.



2 yarım 1 bütün eder.

6 yarım ekmek bütün ekmek eder.

8 yarım ekmek bütün ekmek eder.