



KESİRLER

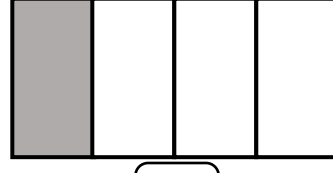
Aşağıdaki şekillerin boyalı kısımlarına karşılık gelen kesirleri yazınız



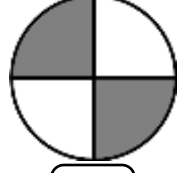
$$\frac{1}{2}$$



$$\frac{\square}{\square}$$




$$\frac{\square}{\square}$$




$$\frac{\square}{\square}$$

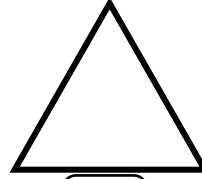
Aşağıdaki bütünleri 2 eş parçaya ayırınız. Bir parçasını boyayınız Boyanmış parçaya karşılık gelen kesri yazınız




$$\frac{1}{2}$$



$$\frac{\square}{\square}$$

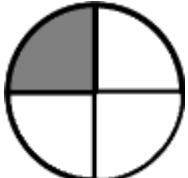


$$\frac{\square}{\square}$$



$$\frac{\square}{\square}$$


Aşağıdaki bütünleri 4 eş parçaya ayırınız. Bir parçasını boyayınız Boyanmış parçaya karşılık gelen kesri yazınız




$$\frac{1}{4}$$



$$\frac{\square}{\square}$$



$$\frac{\square}{\square}$$



$$\frac{\square}{\square}$$

Pastanın yenen kısmını belirten kesri yuvarlak içine alınız.



$$\frac{3}{4}$$

$$\frac{3}{4}$$

$$\frac{2}{4}$$

Pizzanın yenen kısmını belirten kesri yuvarlak içine alınız.



$$\frac{1}{2}$$

$$\frac{1}{4}$$

$$\frac{2}{2}$$