


























NESNELERİ SAYALIM

Nesneleri sayalım. Kaç tane olduklarını rakamla alttaki kutucuklara yazalım.

							
<input type="text"/>	<input type="text"/>	<input type="text"/>	<input type="text"/>	<input type="text"/>	<input type="text"/>	<input type="text"/>	<input type="text"/>

						
<input type="text"/>	<input type="text"/>	<input type="text"/>	<input type="text"/>	<input type="text"/>	<input type="text"/>	<input type="text"/>

				
<input type="text"/>	<input type="text"/>	<input type="text"/>	<input type="text"/>	<input type="text"/>

				
<input type="text"/>	<input type="text"/>	<input type="text"/>	<input type="text"/>	<input type="text"/>

NESNELERİ SAYALIM

Nesneleri sayalım. Kaç tane olduklarını rakamla alttaki kutucuklara yazalım.

