
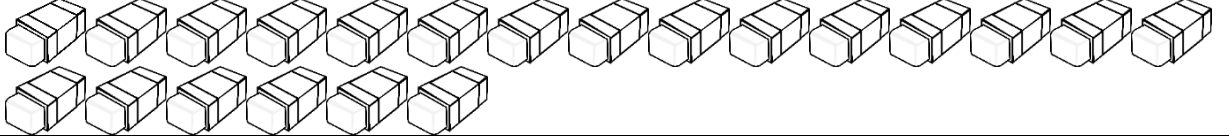
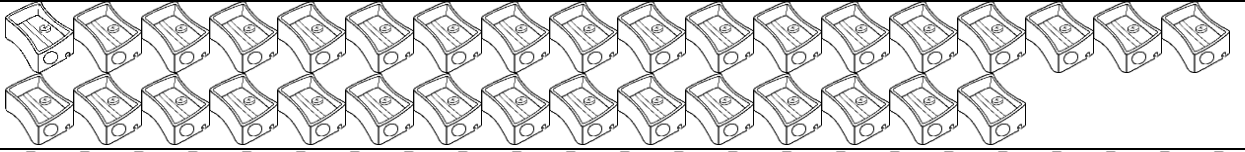
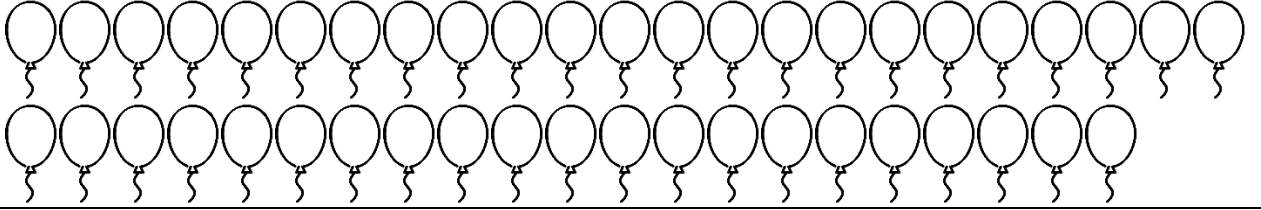


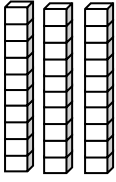

1 deste silgi çiziniz.

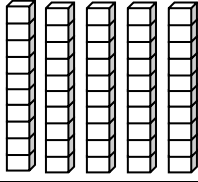
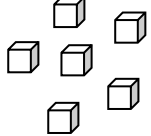
1 düzine kalem çiziniz.

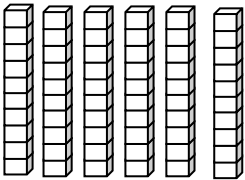
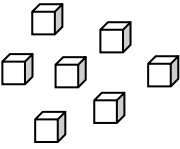
Aşağıdaki tabloda verilen sayı kadar görseli boyayınız

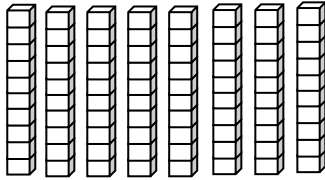
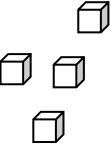
9	
19	
29	
42	

Aşağıdaki tablolarda boş bırakılan yerleri doldurunuz.

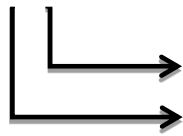
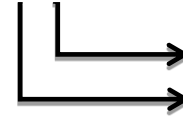



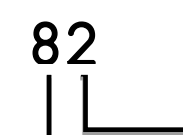
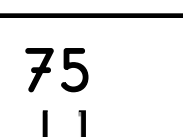
Onluklar	Birlikler
	
..... Onluk Birlik
..... sayısında.....onluk +....birlik vardır.	

Onluklar	Birlikler
	
..... Onluk Birlik
..... sayısında.....onluk +....birlik vardır.	

Onluklar	Birlikler
	
..... Onluk Birlik
..... sayısında.....onluk +....birlik vardır.	

Onluklar	Birlikler
	
..... Onluk Birlik
..... sayısında.....onluk +....birlik vardır.	

DOĞAL SAYILAR

39	<u>Basamak adı</u>	<u>Basamak değeri</u>
	Birler basamağı → 9 Onlar basamağı → 30	
41	<u>Basamak adı</u>	<u>Basamak değeri</u>
 basamağı → basamağı →	
54	<u>Basamak adı</u>	<u>Basamak değeri</u>
 basamağı → basamağı →	
63	<u>Basamak adı</u>	<u>Basamak değeri</u>
 basamağı → basamağı →	
98	<u>Basamak adı</u>	<u>Basamak değeri</u>
 basamağı → basamağı →	
82	<u>Basamak adı</u>	<u>Basamak değeri</u>
 basamağı → basamağı →	
75	<u>Basamak adı</u>	<u>Basamak değeri</u>
 basamağı → basamağı →	